

Friday 15th January Maths Task Spicy

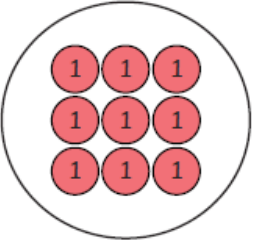
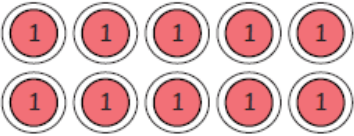
Multiplying and Dividing by 1 and 0.

Today we will be multiplying and dividing by 1 and 0. But first let's recap our learning from this week.

1. $12,000 \div 100 =$
2. $3200 \div 100 =$
3. $34 \times 100 =$
4. $430 \div 10 =$
5. $450 \times 100 =$
6. $2100 \div 100 =$

Task 1: Look at the INPUT PDF and complete the warm up tasks.

Task 2: Complete the table below.

Draw It			
Describe It	There is ____ group of ____.	There are 5 groups of 0.	There are ____ groups of ____.
Write It			

Task 3: Solve these calculations.

$$8 \times 1 = \square$$

$$13 \times 1 = \square$$

$$20 \times 1 = \square$$

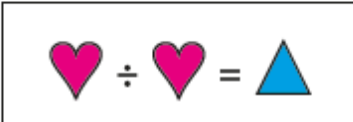
$$8 \div 1 = \square$$

$$13 \div 1 = \square$$


$$20 \div 1 = \square$$

What do you notice about multiplying and dividing by 1?

Task 4: Can you solve these problems?



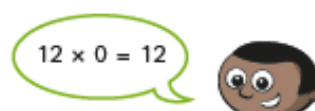
Complete this calculation.



How did you work this out?



What mistake has Eva made?



What mistake has Mo made?
